

Choose the best answer.

1. **Mental Math** New York City has an area of 303 square miles. Philadelphia has an area of 135 square miles. How many more square miles does New York City have than Philadelphia?























**A** 278  
**B** 268  
**C** 178  
**D** 168

2. Which sentence is true?

**A**  $473 > 522 - 40$   
**B**  $563 > 357 + 210$   
**C**  $635 = 558 + 80$   
**D**  $712 > 542 + 150$

3. Use the pictograph. Who sold the most boxes of cookies?

**Boxes of Cookies Sold**

Hector	     
Savannah	    
Tamra	      
Ervin	   

**A** Savannah  
**B** Hector  
**C** Ervin  
**D** Tamra

At the school fair, each game costs 3 tickets. Miriam tried to figure out how many games she could play with 18 tickets.

*Miriam's Work*

Tickets	Games
3	1
6	2
9	3
11	4
13	5
15	6
17	7

seven games and one ticket left over

4. Miriam's work is incorrect. Rewrite the table and fill in the correct numbers for each column.

5. Write  $3,000 + 70 + 9$  in standard form.

\_\_\_\_\_